



NEW G.M.T SEN SEC PUBLIC SCHOOL

SUMMER HOLIDAY HOMEWORK

CLASS - IV



**HOLIDAY
HOMEWORK**

Keep your child's brain active over break
without them knowing they're doing
"homework"

Assignment: (To be done in the HHW notebook)

1. Read this poem about 'Tigers' and answer the questions that follow:

May there always be tigers.
In the jungles and tall grass
May the tiger's roar be heard,
 May his thunder
 Be known in the land.
At the forest pool, by moonlight
May he drink and raise his head
 Scenting the light wind.
May he crouch low in the grass
 When the herdsmen pass,
And slumber in dark caverns
 When the sun is high.
May there always be tigers.
But not so many, that one of them
Might be tempted to come into my room
 In search of a meal!



A. Match the following words and meanings:

	Word	Meaning
i.	thunder	cave
ii.	crouch	smelling
iii.	scenting	sleep
iv.	slumber	bend
v.	cavern	roar

B. Name the animal in the poem

C. Where do we find tigers?

D. What does the tiger smell?

E. Where does the tiger sleep?

F. Who would be tempted to come in the poet's room and why?

G. Find the words in the poem which mean the opposite to these words:

Short, lost, high, never

2. Write the following words in an alphabetical order:

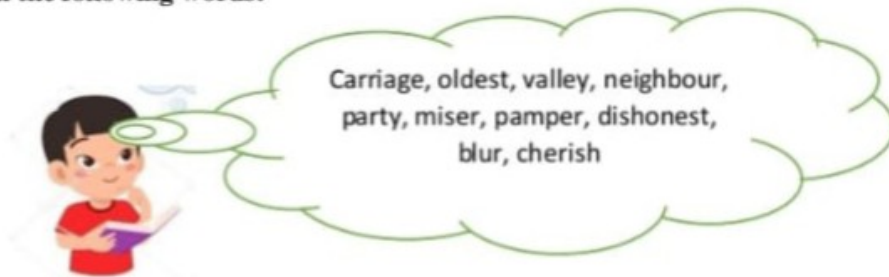
choice, ant, elephant, monkey,
tortoise, chilli, shark, story, stamp,
steel, stadium, church, start, beans,
bananas, apples, cucumbers, carrots,
panda, peanuts, cheese, prove,
popcorn, chalk, pizza

3. Match Column A with Column B to make correct collective nouns:

Column A	Column B
1. A crowd of	Thieves
2. A team of	lions
3. A gang of	wood
4. A catch of	chocolate
5. A forest of	People
6. A pair of	sticks
7. A pride of	Players
8. A bundle of	directors
9. A bar of	shoes
10. A board of	fish

4. Paste a picture of any scene of your choice and describe it in 50-60 words.

5. Make sentences with the following words:



6. You are Mohit Sharma, Secretary of the Cultural Club of ACB Public School, Moga. Write a notice to inform the students about an Inter- school Dance Competition that your school is organizing on 10 July 2024 in your school.

7. Solve Part- B given on page no. 9 (Grammar book)

8. Fill in the blanks with suitable subjects and predicates:

- The girl.....
- The Sun.....
-is my favourite book.
-live in Delhi.
-is the capital of Goa.
- The stars.....
-is making a table.
-is my best friend.
- Mohan.....

9. Use the words given in the box to complete the masculine and feminine pairs correctly.

Peacock, goose, drake, stallion, doe, bull, drone, ram, fox, sow

Masculine	Feminine	Masculine	Feminine
1. Gander	6. buck
2.	Cow	7.	Vixen
3.	Mare	8.	Queen bee
4.	Peahen	9.....	Ewe
5.	duck	10.bear

10. Write abstract nouns of the following words:

Kind, smart, independent, silent, brave, intelligent, free, improve, arrange, hate, decide, reduce, laugh, serve, friend, slave.

विषय- हिंदी

(1) रेखांकित शब्दों के लिंग बदलकर वाक्य दोबारा लिखें:-

- (क) मोर बाग में नाच रहा है।
- (ख) नौकरानी आज नहीं आएगी।
- (ग) दादाजी पिकी को बाग में लेकर गये।
- (घ) लड़कियाँ स्कूल जा रही हैं।
- (च) बालक हँस रहा है।

(2) नीचे दिए शब्दों की विपरीत शब्द लिखिए:-

पक्का	अगला
असली	महंगा
खरीदना	निडर
आधार.	गुण
आरंभ.	निश्चित

(3) संज्ञा शब्दों को रेखांकित करें:-

- (क) आसमान में तारे चमकते हैं।
- (ख) कमला बाजार गई हैं।
- (ग) दुकान पर खिलौने सजे हैं।
- (घ) धोबी कमीज़ धो रहा है।
- (च) भालू नाच दिखा रहा है।
- (छ) कमरे में पंखा चल रहा है।

(4) रेखांकित शब्दों के वचन बदलकर वाक्य दोबारा लिखें:-

- (क) मैंने कविता लिखी।
- (ख) यह मेरी किताब है।
- (ग) तोता बोल रहा है।
- (घ) बच्चा कविता सुना रहा है।

(5) नीचे दिए शब्दों के दो-दो पर्यायवाची शब्द लिखिए:-

समुद्र	शीशा
भाई	पक्षी

बरसात

कोयल

(6) नीचे दिए गए शब्दों के अर्थ बताएं:-

धरा

पवन

महत्व

सुगंधित

दृष्टि

मोहित

उपयोगी

प्रार्थना

रक्षक

भाईचारे

(7) दिए गए शब्दों को वाक्य में प्रयोग कीजिए:-

(क) वायु

(ख) स्वच्छ

(ग) प्रार्थना

(घ) खूँखार

(येच) तालाब

(छ) मनुष्य

(ज) कोठरी

(8) नीचे दिए शब्दों के वर्णों को अलग-अलग करके लिखिए:-

(क) सप्ताह

(ख) मित्रता

(ग) मुकाबला

(घ) कैद

(च) बर्बाद

(छ) दृष्टि

(ज) पूर्व

ਨਾਮ----- ਜਮਾਤ----- ਸੈਕਸ਼ਨ--- ਰੋਲ ਨੰ:---

1. ਹੇਠ ਲਿਖੇ ਸ਼ਬਦ ਸਮੂਹਾਂ ਵਿੱਚੋਂ ਨਾਂਵ ਅਤੇ ਵਿਸ਼ੇਸ਼ਣ ਸ਼ਬਦ ਵੱਖ-ਵੱਖ ਕਰੋ :

ਨਾਂਵ

ਵਿਸ਼ੇਸ਼ਣ

- | | | |
|-----------------|-------|-------|
| 1. ਵਿਹਲੇ ਮਜ਼ਦੂਰ | _____ | _____ |
| 2. ਗੰਦਾ ਮੂੰਹ | _____ | _____ |
| 3. ਚਲਾਕ ਪੂੜੀ | _____ | _____ |
| 4. ਮੋਟੀ ਲੁੰਬੜੀ | _____ | _____ |

2. ਬਹੁਤੇ ਸ਼ਬਦਾਂ ਦੀ ਥਾਂ ਇੱਕ ਸ਼ਬਦ ਲਿਖੋ :-

- | | |
|---------------------------------|-------|
| 1. ਜਿਸ ਨੂੰ ਸਾਰੇ ਪਿਆਰ ਕਰਨ | _____ |
| 2. ਗੁਆਂਢ ਵਿੱਚ ਰਹਿਣ ਵਾਲਾ | _____ |
| 3. ਜਿੱਥੇ ਪੰਛੀ ਰਾਤ ਨੂੰ ਰਹਿੰਦੇ ਹਨ | _____ |
| 4. ਦੂਜਿਆਂ ਦਾ ਭਲਾ ਕਰਨ ਵਾਲਾ | _____ |

3. ਹੇਠ ਦਿੱਤੇ ਸ਼ਬਦਾਂ ਦੇ ਵਿਰੋਧੀ ਸ਼ਬਦ ਲਿਖੋ :-

- | | |
|----------|-------|
| 1. ਮਿੱਠਾ | _____ |
| 2. ਹੱਸਣਾ | _____ |
| 3. ਵੱਸਣ | _____ |
| 4. ਠੰਢਾ | _____ |
| 5. ਛਾਂ | _____ |

|

ਨਾਂਵ

ੳ) ਨਾਂਵ ਦੀਆਂ ਕਿਸਮਾਂ ਲਿਖੋ:-

ਅ) ਹੇਠਾਂ ਬਰੈਕਟ () ਵਿੱਚ ਲਿਖੇ ਸ਼ਬਦਾਂ ਨੂੰ ਭਾਵਵਾਚਕ ਨਾਂਵ ਵਿੱਚ ਬਦਲ ਕੇ ਠੱਲੀ ਥਾਂਵਾਂ ਭਰੋ।

- 1) ਬਰਗਦ ਦੇ ਇਸ ਦਰੱਖਤ ਦੀ _____ ਬਹੁਤ ਜਿ ਆਦਾ ਹੈ। (ਉੱਚਾ)
- 2) ਮੈਨੂੰ ਆਪਣਾ _____ ਬਹੁਤ ਯਾਦ ਆਉਦਾ ਹੈ। (ਬੱਚਾ)
- 3) _____ ਦੇ ਕਾਰਨ ਉਸ ਤੋ ਚੱਲਿਆ ਨਹੀ ਜਾ ਰਿਹਾ ਸੀ। (ਥੱਕਣਾ)
- 4) ਸਾਨੂੰ _____ ਦਾ _____ ਨਾਲ ਸਾਹਮਣਾ ਕਰਨਾ ਚਾਹੀਦਾ ਹੈ। (ਕਠਿਨ, ਵੀਰ)
- 5) ਕਸ਼ਮੀਰ ਦੀ _____ ਸਾਰਿਆਂ ਨੂੰ ਅਕਰਸ਼ਿਤ ਕਰਦੀ ਹੈ। (ਸੁੰਦਰ)

Fill in the blanks:

- What is the smallest 6-digit number? _____
- What number comes between 675432 and 675434? _____
- What you will get after adding 999 to smallest 6-digit number? _____
- Write numerals for Seven lakh five hundred seventy-five _____
- What you will get after adding 1 to greatest 6-digit number? _____
- Write expanded form of 890405 _____
- Write the short form of 2 Lakhs + 4 thousands + 3 tens + 6 ones = _____
- Write the short form 500000 + 40000 + 8000 + 300 + 5 = _____
- What is the place value of 6 in 765403? _____
- Find the difference of place value of 9 and 5 in the number 490850. _____
- Find the sum of place value of 5 and 7 in the number 507063. _____



Roman Numerals:

I 1	II 2	III 3	IV 4	V 5	VI 6	VII 7	VIII 8	IX 9	X 10
X 10	XX 20	XXX 30	XL 40	L 50	LX 60	LXX 70	LXXX 80	XC 90	C 100

Write the correct number next to each Roman numeral.

- | | |
|-------------------|--------------------|
| 1) XVII = _____ | 8) LXII = _____ |
| 2) XX = _____ | 9) XLVI = _____ |
| 3) XIV = _____ | 10) XC = _____ |
| 4) XXV = _____ | 11) LXXIII = _____ |
| 5) LI = _____ | 12) C = _____ |
| 6) XL = _____ | 13) XXIX = _____ |
| 7) XXXVII = _____ | 14) XCVII = _____ |



Write the correct Roman numerals next to each number.

- | | |
|---------------|----------------|
| 1) 13 = _____ | 8) 28 = _____ |
| 2) 30 = _____ | 9) 60 = _____ |
| 3) 9 = _____ | 10) 72 = _____ |
| 4) 50 = _____ | 11) 80 = _____ |
| 5) 25 = _____ | 12) 59 = _____ |
| 6) 19 = _____ | 13) 90 = _____ |
| 7) 41 = _____ | 14) 88 = _____ |



✚ Write the number name of the following using both Indian and International number system:

a) 120020:

Indian _____

International: _____

b) 987561:

Indian _____

International: _____

c) 806170

Indian _____

International: _____

d) 201035

Indian _____

International: _____

✚ Write the successors and predecessors of the following:

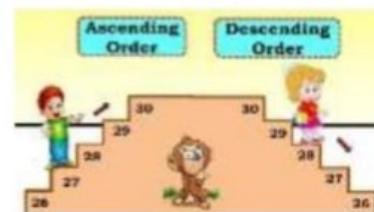
a) _____, 99009, _____

b) _____, 784513, _____

c) _____, 586995, _____

d) _____, 999999, _____

e) _____, 787120, _____



✚ Arrange the following in ascending order:

a) 682080, 627035, 391253, 981532 _____

b) 235453, 231232, 236431, 228452 _____

c) 4612, 46102, 406102, 2164, 46012 _____

d) 3997, 86944, 62393, 41584, 105618 _____

✚ Arrange the following in descending order:

a) 952045, 672023, 502034, 432001 _____

b) 672080, 827035, 931253, 981532 _____

c) 21450, 578912, 287584, 235871 _____

d) 108586, 288945, 99886, 908732 _____



Activity -1

Eating a healthy diet may not prevent every disease, but it gives you the best defence to live a long and healthy life. Many a times, we eat to please our taste buds, but remain quite unaware about the health hazards that this type of eating habit might pose. Every nutrient has their own individual roles to play in the physical and mental development for our body. Now let us understand the importance of eating healthy food by making a collage on

"My Favourite Cuisine and its Nutritive Value"

You are required to make a collage on scrap book

as per the guidelines mentioned below. a). Paste a picture of your favourite cuisine

b) Write a recipe of that dish and ingredients name

c) Make a table of nutrition facts for that dish.

d) Decorate the collage using colourful boundaries, decorative material, colours and sparkle pens.

Activity -2

Make a table on loose sheet, of eatables from your kitchen and write down nutrients obtained from it.

For example:

Nutrients Obtained	Name of Eatable
1. Protein	Milk, Pulses, Cheese, egg
2. Carbohydrate	
3. Fats	
4. Vitamins	
5. Minerals	
6. Water and Roughage	

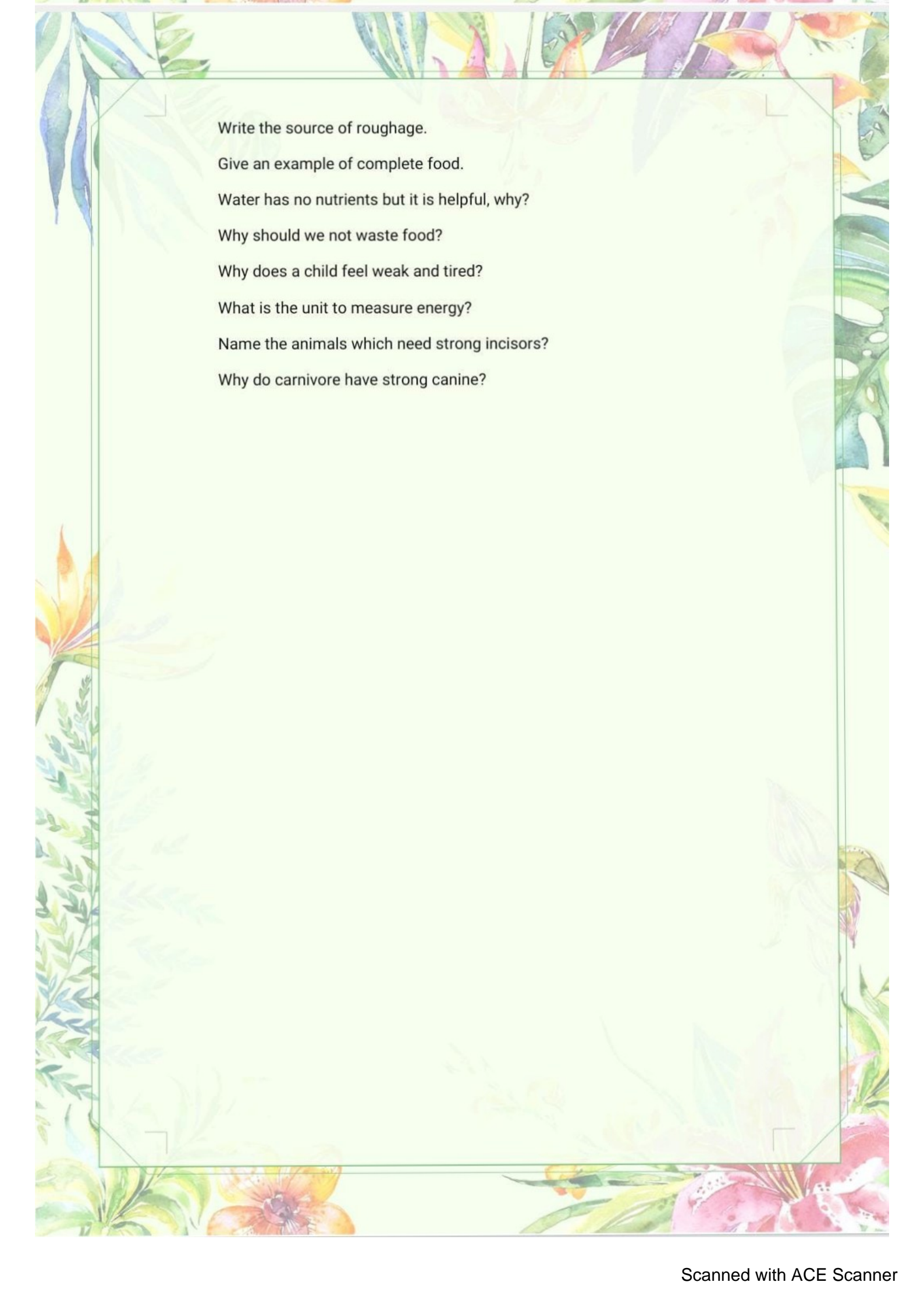
* Draw the chart of items of carbohydrates and proteins. Four of each type, name should be of height 5 CM.

Assignment, Do on loose sheets

- 1) Write the name of various new nutrients.
- 2) Why do we eat food? Write three ways.
- 3) Write 3 sources of carbohydrates and proteins each.
- 4) Why is roughage useful in our diet?
- 5) Write different types of teeth and their functions?
- 6) How can we take care of our teeth?
- 7) What is the digestion?
- 8) How is saliva useful in digestion?
- 9) Which juices come in the small intestine?
- 10) What are Gastric juices?
- 11) Draw the chart of human digestive system.
- 12) What is obesity?

Write the source of roughage.

Give an example of complete food.



Write the source of roughage.

Give an example of complete food.

Water has no nutrients but it is helpful, why?

Why should we not waste food?

Why does a child feel weak and tired?

What is the unit to measure energy?

Name the animals which need strong incisors?

Why do carnivore have strong canine?

(Holiday Home Work Class 4th)
Social Studies

- 1 What is sun?
- 2 How are days and nights formed?
- 3 Why Earth known as Blue Planet.
- 4 In which galaxy Solar System is located?
- 5 Why does the MOON change it's shape daily?
- 6 Who wrote National Anthem of INDIA?
- 7 Which colour stands for Bravery and Sacrifice?
- 8 Why does the capital of Jammua and Kashmir shifted from Srinagar to Jammu in winter?
- 9 Name the second most populated country of world after China?
- 10 Shmila ,Mussoorie,Dalhousie are located in which Range of Mountain?
- 11 Name of the neighbouring countries of the northern India.
- 12 Which of the desert belong to India?.
- 13 How many main Rivers are there in Punjab?
- 14 How much Sun away from us?
- 15 Write the Historical placed of Punjab?

